

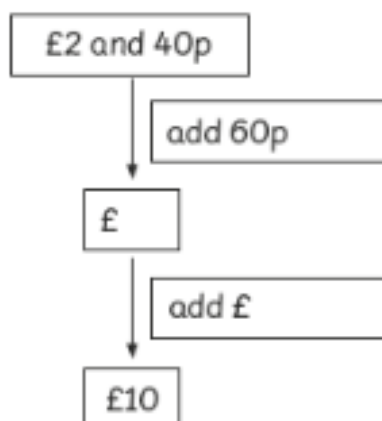
Worksheet 12

Calculating Change

- 1 Ravi had £10. He bought a glass of juice.
How much change did he get?



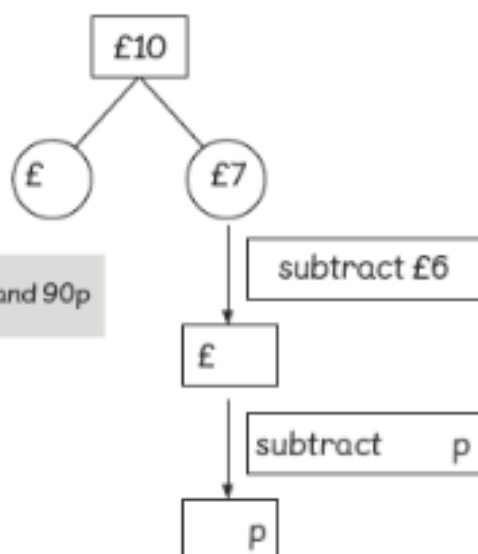
He got change.



- 2 Amira had £10. She bought a chicken burger.
How much change did she get?



She got change.



3 Calculate the change.

(a)   

(b)   

(c)   

(d)   

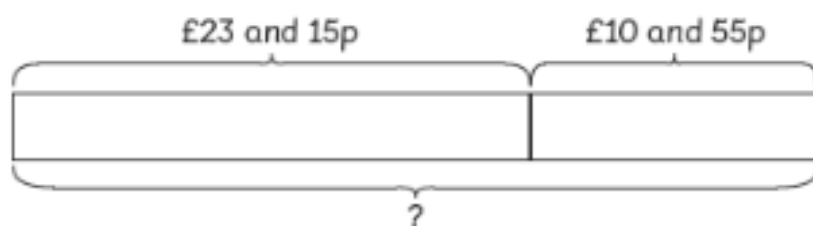
(e)   

Worksheet 13

Solving Word Problems

Solve.

- 1 Emma bought five magazines for £10 and 55p.
She also bought a book for £23 and 15p.
How much did Emma spend altogether?



$$\boxed{} \bigcirc \boxed{} = \boxed{}$$

Emma spent $\boxed{}$ altogether.

- 2 Ruby saved £24 and 90p in Week 1 and £35 and 20p in Week 2.
How much did she save in the two weeks?

$$\boxed{} \bigcirc \boxed{} \bigcirc \boxed{}$$

- 3 Elliott spent £14 and 60p.
His brother spent £9 and 40p more than him.
How much did Elliott's brother spend?

	○		○	
--	---	--	---	--



- 4 Lulu bought a dress at a sale.
It was £10 and 50p cheaper than the original price.
How much did she spend on the dress after the discount?



- 5 Sam bought a shirt for £30 and 40p at Mall A.
He spent 90p less for a similar shirt at Mall B.
How much did the shirt from Mall B cost?

£30 and 40p



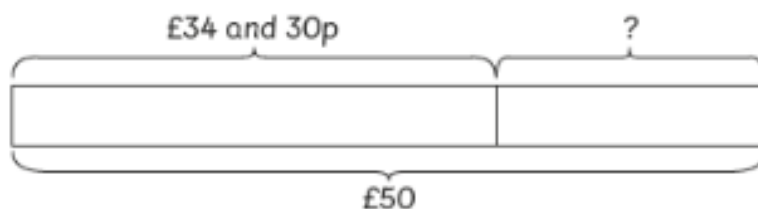
- 6 Ravi saved £42 and 30p.
Charles saved £6 and 90p less than Ravi saved.
How much did they save altogether?

Worksheet 14

Solving Word Problems

Solve.

- 1** A fishing rod costs £34 and 30p.
Sam paid for it with a £50 note.
How much change did Sam get?



Sam got change.

- 2** Hannah bought a handbag for £25 and 50p.
She gave the cashier two £20 notes.
How much change did she get?

- 3 Amira bought a pair of shoes and a skirt.
The pair of shoes cost £45 and 10p and the skirt cost £25.
After buying the items, she had £24 and 90p left.

(a) How much did the two items cost?

(b) How much did Amira have to begin with?

Review 8

Write the amount of money.

(a)



(b)



(c)



2 Find the total price.

£		p			
+	£		+	p	
<hr/>			<hr/>		
£		p			
<hr/>					

£45 and 90p

£18 and 65p

p

→

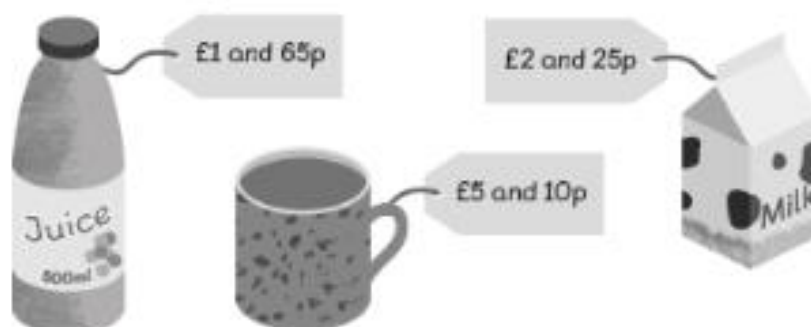
£

and

p

The total price is .

3 Answer the following.



- (a) The carton of milk costs more than the bottle of orange juice.
- (b) The total cost of the three items is .
- (c) Emma paid with five £2 coins. She would get change.

4 Calculate the change.



- 5 Elliott saved £37 and 27p in April.
He saved 40p less than this in May.
How much money did Elliott save in May?

- 6 Amira bought some blouses.
She paid the cashier three £10 notes and got back £1 and 35p change.
How much did the blouses cost?

- 7 Holly bought 7 muffins for £7 and 35p.
She bought a carton of milk for £2 and 45p.
If she had £10 and 20p left, how much did she have at first?