


Count objects




1 How many teddy bears are there?

a)



There are teddy bears.

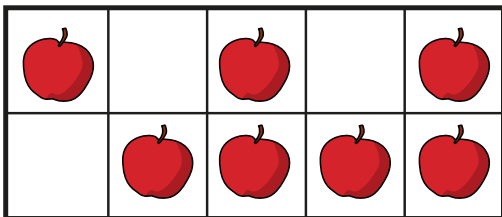
b)



There are teddy bears.

How did you count them?.

2 How many apples are there?



There are apples.


How did you count them?



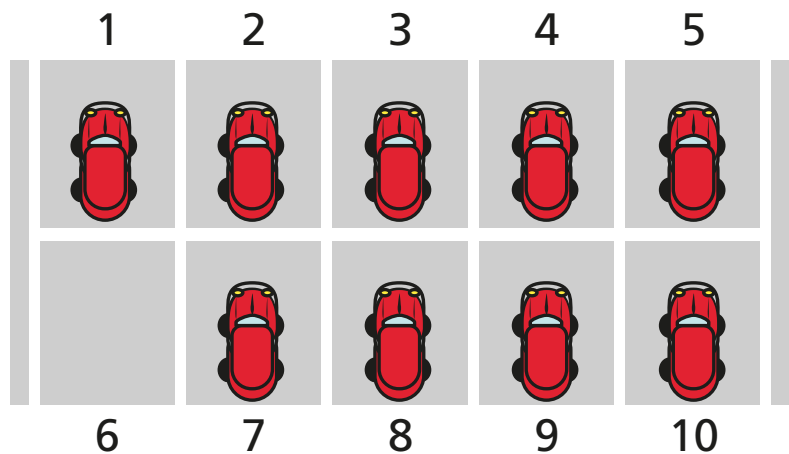
3 Use cubes.

- a) Count 7 cubes.
- b) Count 9 cubes.
- c) Count 6 cubes.

4 Circle 8 frogs.



5 Eva thinks there are 10 cars.



How many cars are there?

There are cars.

What mistake has Eva made?

