

Name

Date








# COUNTING OBJECTS TO 50 SHEET 1A

These objects have been put into groups of 10. Help Newton to count them.

1)	How many? 
2)	How many? 
3)	How many? 
4)	How many? 
5)	How many? 



<p>1) </p>	<p>How many? <u>23</u></p>
<p>2) </p>	<p>How many? <u>35</u></p>
<p>3) </p>	<p>How many? <u>29</u></p>
<p>4) </p>	<p>How many? <u>42</u></p>
<p>5) </p>	<p>How many? <u>38</u></p>