



Weekly Arithmetic 10 a day


w/b 6.7.20

Monday

1. I have 2 10p coins, 1 50p coin and 2 2p coins. How much money do I have?

2.

How many pencils does Molly have?



3. Halimah is 90 cm tall. Joseph is 8 cm taller than Halimah. How tall is Joseph?

Stanley is 2cm taller than Joseph. How tall is Stanley?




4. There are 20 biscuits in the biscuit tin. One child ate 3 biscuits, another child ate 4 biscuits. How many biscuits were left in the tin?
5. There are 24 pens and I need to share them fairly between my 2 friends. How many pens does each friend get?
6. List the multiples of 5 between 25 and 60.
7. It is 27 °C today. What time of year could it be?

Tuesday

1. I am thinking of a shape. It has 5 vertices and 5 corners. What shape is it?
2. $11 + 7 = \underline{\quad}$
This is the same as
 $12 + \underline{\quad}$
 $20 - \underline{\quad}$
 $\underline{\quad} \times \underline{\quad}$
3. There are 6 houses at Heymann. In each class, there are roughly 5 children in each house. How many children are there in each class?
4. Naqi has 70p. Zayd has 6 5p coins, a 10p coin and a 20p coin. He says he has the same amount of money as Naqi. Is he right? Show your working out.
5. It is 11°C today. Tomorrow it is going to be 8°C warmer. What is the temperature going to be tomorrow?
6. There are 30 pencil sharpeners in 2P. 12 of them get lost but then Miss Whitney buys 6 more. How many pencil sharpeners are there now?
7. $10 + 8 = \underline{\quad}$
This is the same as
 $13 + \underline{\quad}$
 $20 - \underline{\quad}$
 $\underline{\quad} \times \underline{\quad}$
8. There are 30 pegs on the washing line. I need to share the pegs equally between 3 people. How many pegs does each person each get?

Wednesday

1. A swimming lesson finishes at half past 5. It takes the family half an hour to drive home. What time do they arrive at home?
2. It's time to think about change! Talk to an adult about what change is and then have a look at these problems, have they been given the correct amount of change? Count carefully!

You buy	You pay	Your change	Correct or Incorrect (✓/x)	Correct amount required
				

You buy	You pay	Your change	Correct or Incorrect (✓/x)	Correct amount required
3. 				

You buy	You pay	Your change	Correct or Incorrect (✓/x)	Correct amount required
4. 				

5. There are 50 sheep in a field. The farmer wants to share the sheep across 10 fields. How many sheep will there be in each field?

Thursday

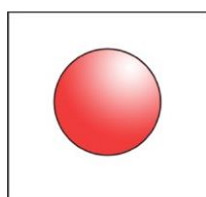
1.



Put the following numbers on the numberline: 11, 14, 23

2. There are 50 people on the bus. 16 get off at the first stop and 9 get off at the second stop. How many people are left on the bus?
3. I am thinking of a shape. It has 6 sides and 6 vertices. What shape is it?
4. There are 7 tables in the in the dinner hall. 5 children sit at each table. How many children are in the dinner hall?
5. Look at the shape below. What shape is it?

List how many **vertices**, **sides** and **faces** it has:



Vertices:

Sides:

Faces:

6. There are 40 sweets. Each child has 5 sweets each. How many children are there?
7. There are 8 bags of salt and vinegar crisps, 7 cheese and onion and 9 smoky bacon. How many bags of crisps are there altogether?

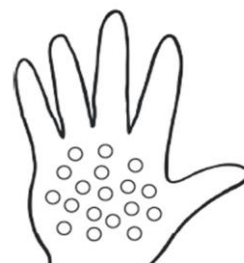
Friday

1. I have 1 10p, 2 20p and £1.00 in my purse. How much money do I have altogether?
2. Tomatoes cost 10p each. Ariya spent 50p. How many tomatoes did she buy?

Molly has 25 beads altogether.

She has 18 beads in one hand.

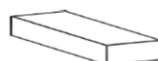
How many beads does she have in the other hand?



beads

- 3.
4. There are 20 cakes. 6 cakes were eaten. How many cakes are there left?
- 5.

Draw lines to match the shapes to their names.



cone



cylinder



cuboid



cube

6. Bananas cost 15p each. Violette has 60p. How many bananas can she buy?