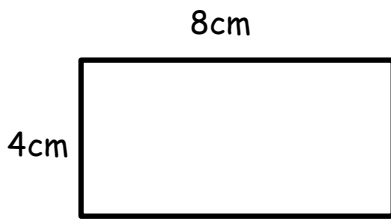
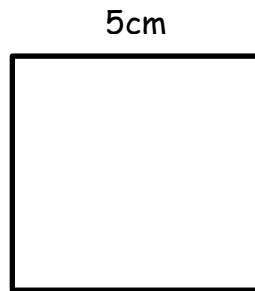


WALT: Calculate the area of shapes

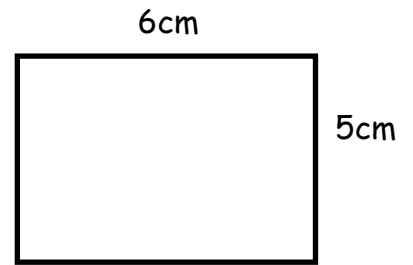
What is the area of this rectangle?



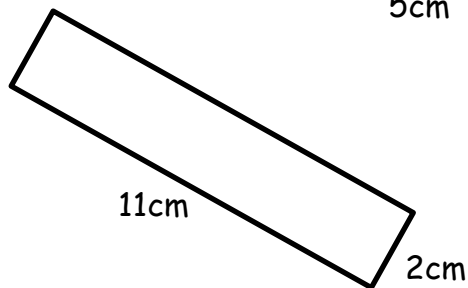
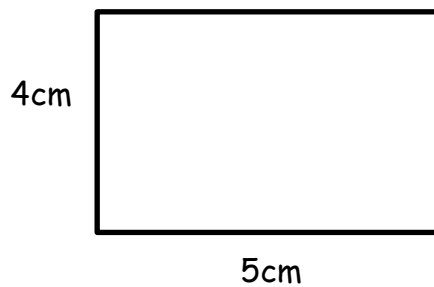
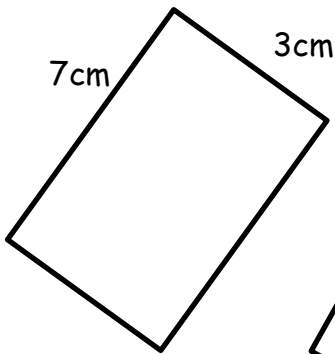
This square has sides of 7cm.  
What is its area?



What is the **total area** of these 2 shapes?

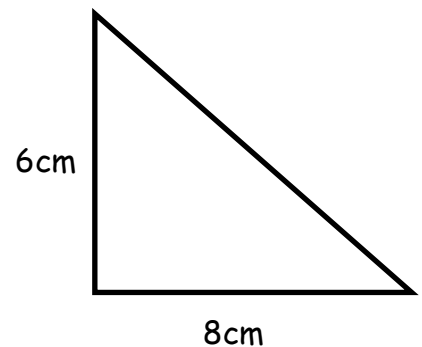


Colour which of these rectangles has the largest area.



Find the area of this triangle.

(Remember that we find the area of the rectangle then divide this by 2!)



Colour the shape/shapes which have an area of  $36\text{cm}^2$ .

