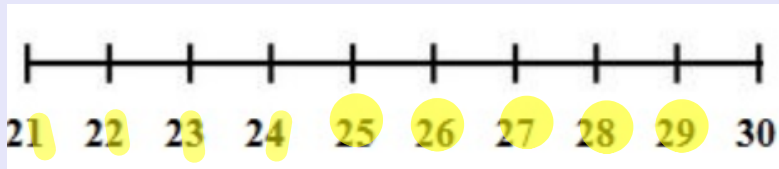


1 more



Look which
column
changes each
time

T	U
2	1
2	2
2	3

The units column goes up by one when we add 1 more.

The tens column stays the same until we reach the next 10.

1 less

59	58	57	56	55	54	53	52	51	50
----	----	----	----	----	----	----	----	----	----

Look which
column
changes each
time

T	U
5	9
5	8
5	7

The units column goes down by 1 when we add 1 more.

The tens column stays the same until we reach the 10 before.

Use a number square to test yourself.

What is 1 more than ____?

What is 1 less than ____?

1	2	3	4	5	6	7	8	9	10
11	12	13	14	15	16	17	18	19	20
21	22	23	24	25	26	27	28	29	30
31	32	33	34	35	36	37	38	39	40
41	42	43	44	45	46	47	48	49	50
51	52	53	54	55	56	57	58	59	60
61	62	63	64	65	66	67	68	69	70
71	72	73	74	75	76	77	78	79	80
81	82	83	84	85	86	87	88	89	90
91	92	93	94	95	96	97	98	99	100

10 more

24	34	44	54	64	74	84	94
----	----	----	----	----	----	----	----

Which column
changes this
time?

The tens column goes up by one when we add 10 more.

The units column always stays the same.

10 more than 77 is

10 more than is 35

10 less

76	66	56	46	36	26	16	6
----	----	----	----	----	----	----	---

Which column
changes this
time?

The tens column goes down by one when we find 10 less.

The units column always stays the same.

10 less than 56 is ...

10 less than is 62

1	2	3	4	5	6	7	8	9	10
11	12	13	14	15	16	17	18	19	20
21	22	23	24	25	26	27	28	29	30
31	32	33	34	35	36	37	38	39	40
41	42	43	44	45	46	47	48	49	50
51	52	53	54	55	56	57	58	59	60
61	62	63	64	65	66	67	68	69	70
71	72	73	74	75	76	77	78	79	80
81	82	83	84	85	86	87	88	89	90
91	92	93	94	95	96	97	98	99	100

We can use an 100 square to help us work out 1 more and less and 10 more and less.

Find 1 Less, 1 More, 10 Less, 10 More

10 Less 28	10 Less <input type="text"/>	10 Less <input type="text"/>
1 Less 37	1 Less <input type="text"/>	1 Less <input type="text"/>
38	67	42
1 More 39	1 More <input type="text"/>	1 More <input type="text"/>
10 More 48	10 More <input type="text"/>	10 More <input type="text"/>

10 Less <input type="text"/>	10 Less <input type="text"/>	10 Less <input type="text"/>
1 Less <input type="text"/>	1 Less <input type="text"/>	1 Less <input type="text"/>
84	18	55
1 More <input type="text"/>	1 More <input type="text"/>	1 More <input type="text"/>
10 More <input type="text"/>	10 More <input type="text"/>	10 More <input type="text"/>


10 Less <input type="text"/>	10 Less <input type="text"/>	10 Less <input type="text"/>
1 Less <input type="text"/>	1 Less <input type="text"/>	1 Less <input type="text"/>
21	73	99
1 More <input type="text"/>	1 More <input type="text"/>	1 More <input type="text"/>
10 More <input type="text"/>	10 More <input type="text"/>	10 More <input type="text"/>

The number in the middle is your starting number.


Extra- If you have time!

Games to play to practice 1 more, 1 less, 10 more, 10 less

Choose numbers 1-100

 <https://www.topmarks.co.uk/learning-to-count/chopper-squad>

10 more game

 <https://www.ictgames.com/mobilePage/depthCharger/index.html>