

1 How many children are there in each group?



Complete the sentences.

There are children in group A.

There are children in group B.


There are children in group C.

The smallest group is ____.


The greatest group is ____.




2



A



B



C

Complete the sentences.


The greatest group is ____.

The _____ group is B.

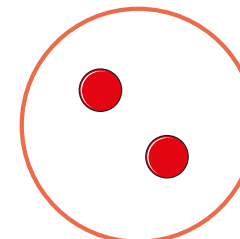
3

Draw counters in group A to make:


- group B the smallest
- group C the greatest.



A



B



C

Is there more than one answer?

Find them all.

