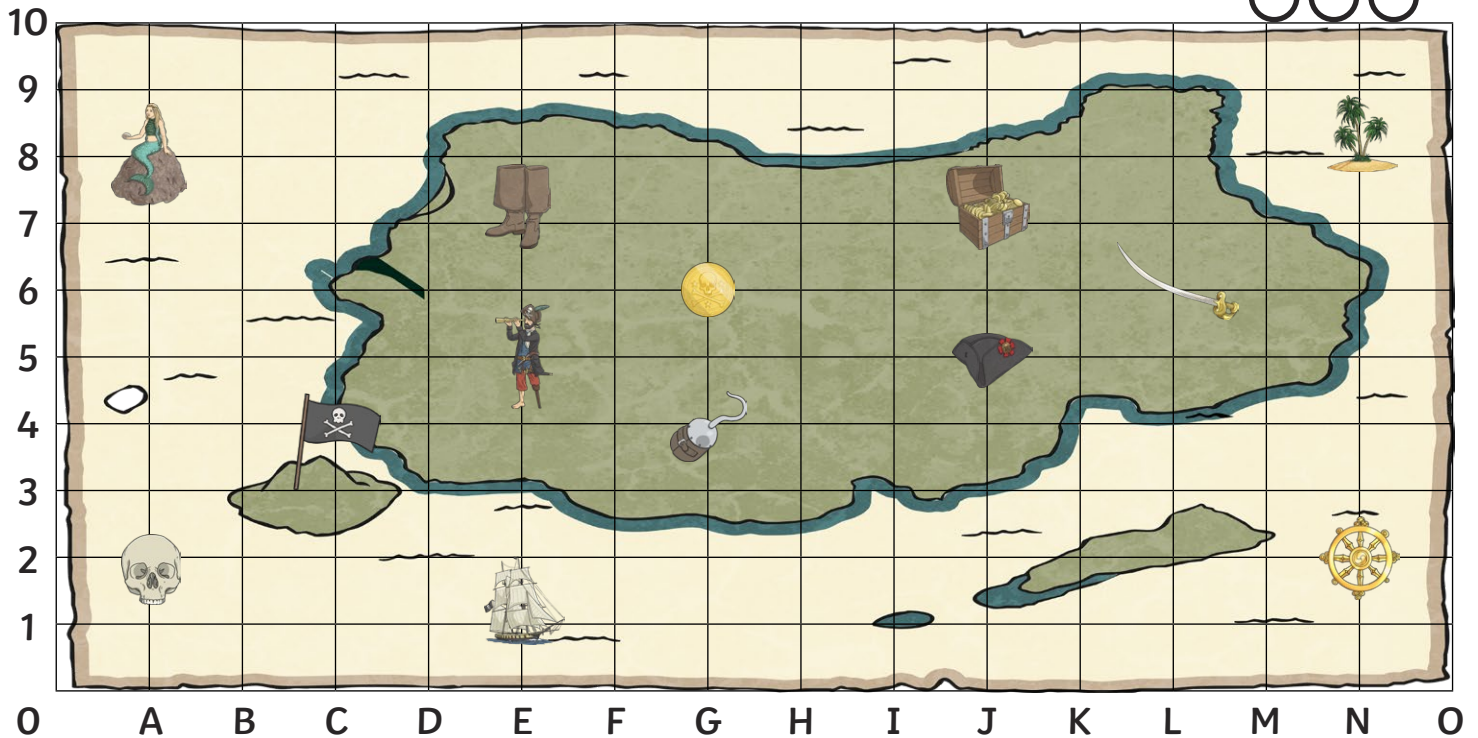


Pirate Map Coordinates

I can read, write and plot coordinates in the first quadrant.



What is at these coordinates on the pirate map?

(E,5) = _____


(G,6) = _____

(L,6) = _____


(J,7) = _____


(A,8) = _____


Write the coordinate of these places on the pirate map:

 = (,)

 = (,)

 = (,)

 = (,)

 = (,)

Plot these coordinates on the grid using a cross.

(B,1)

(N,5)

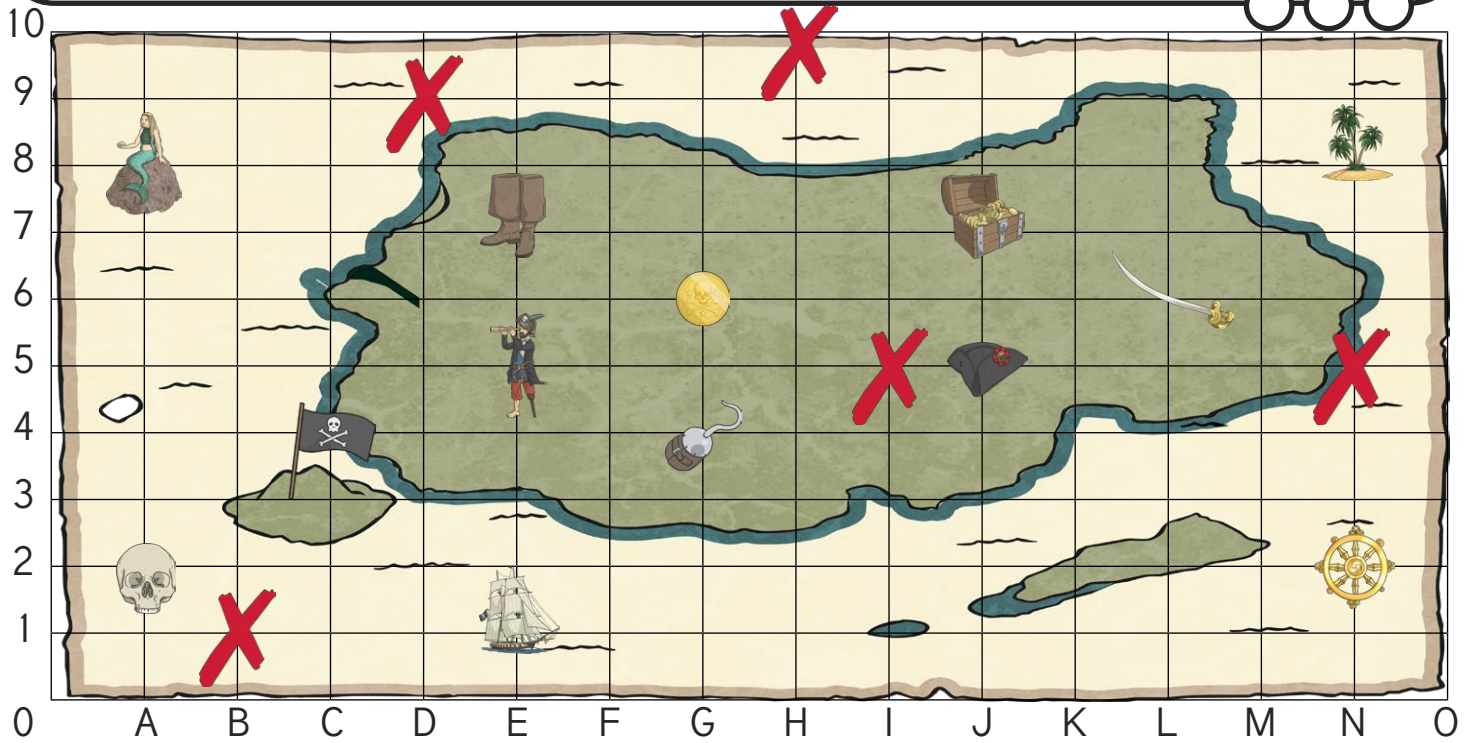
(I,5)

(D,9)

(H,10)

Pirate Map Coordinates

I can read, write and plot coordinates in the first quadrant.



What is at these coordinates on the pirate map?

(E,5) = pirate


(G,6) = gold coin


(L,6) = sword


(J,7) = treasure


(A,8) = mermaid


Write the coordinate of these places on the pirate map:

 = (**E** , **7**)

 = (**G** , **4**)

 = (**N** , **8**)

 = (**C** , **4**)

 = (**N** , **2**)

Plot these coordinates on the grid using a cross.

(B,1)

(N,5)

(I,5)

(D,9)

(H,10)