

Name;

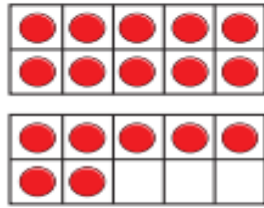
Lesson 1 w/c 4<sup>th</sup> January 2021

Counting Forwards and Backwards to 20.

**1** Match the picture to the numeral.



12



14



17

**4** Complete the number tracks.

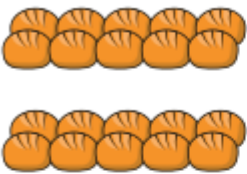

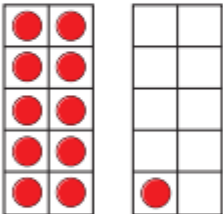
10	11	12							
----	----	----	--	--	--	--	--	--	--

			12	13					
--	--	--	----	----	--	--	--	--	--

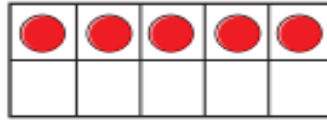
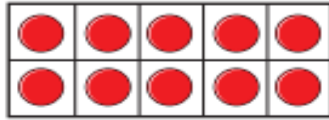
18	17								
----	----	--	--	--	--	--	--	--	--

**I** Complete the table.



Picture	Numeral	Word
	20	
		
		
	12	
		seventeen

**2** Here is a number.

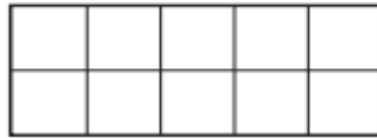
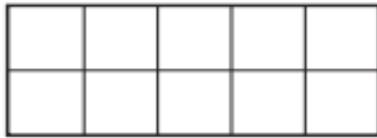


**a)** What is the number?

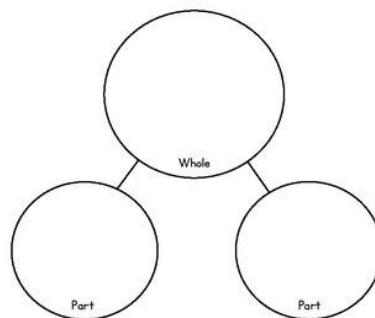
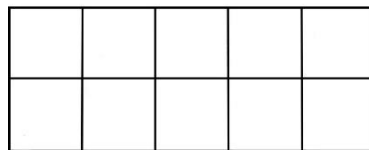
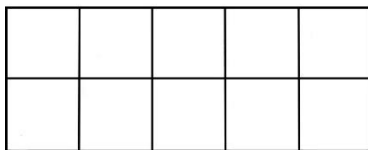
**b)** Use counters and ten frames.

Make this number in a different way.

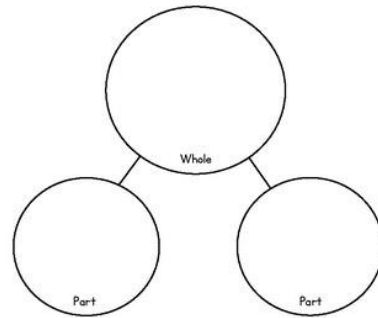
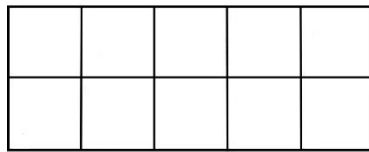
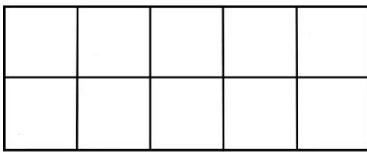
Draw your counters.



Make the number;



Make the number;



Make the number;

