


ADD ONES USING NUMBER BONDS



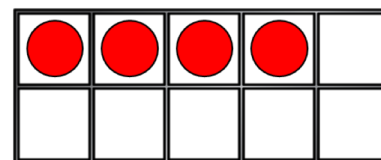
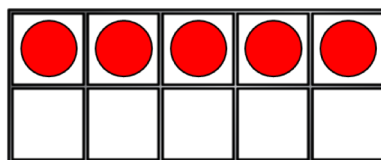
GET READY



1) What is one more than 9?

2) $6 + ? = 10$

3) How many?



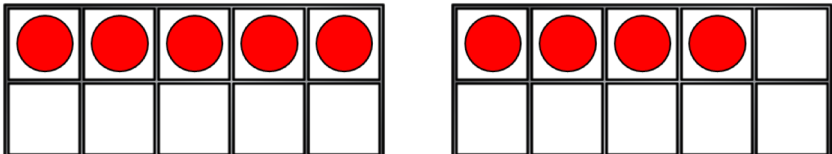
4) These are number bonds to ____

$$5 + 2$$

$$3 + 4$$

1) What is one more than 9? 10

2) $6 + ? = 10$ 4

3) How many?  9

4) These are number bonds to 7

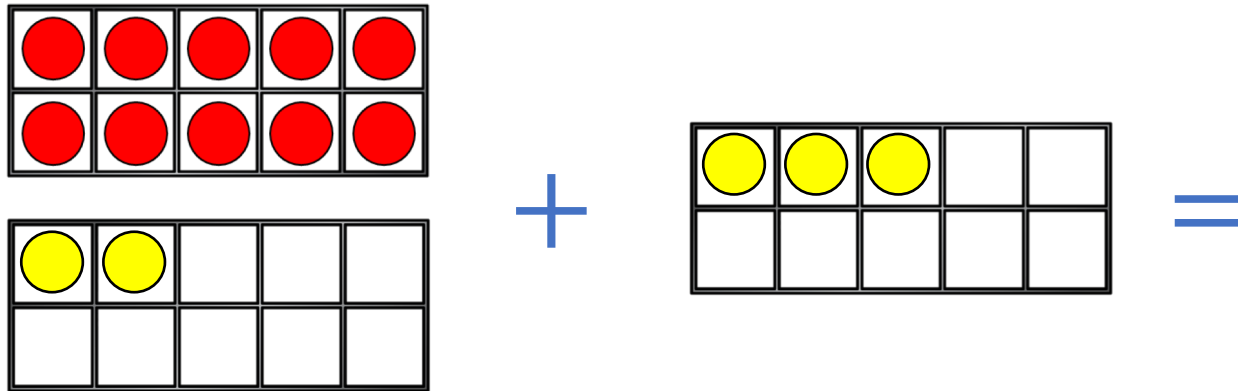
5 + 2 3 + 4

LET'S LEARN



Using number bonds

$$12 + 3 = 15$$

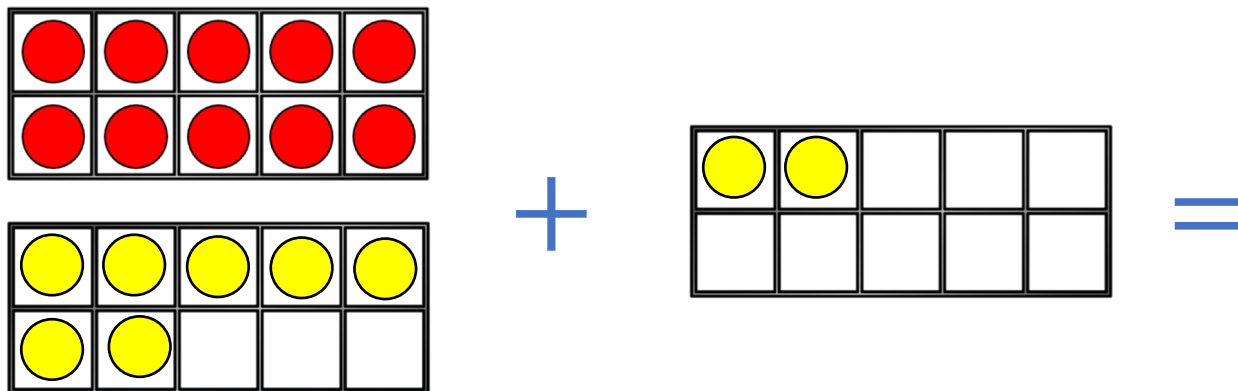


1 ten + 2 ones add 3 ones

1 ten + 5 ones

Using number bonds

$$17 + 2 = 19$$



1 ten + 7 ones add 2 ones

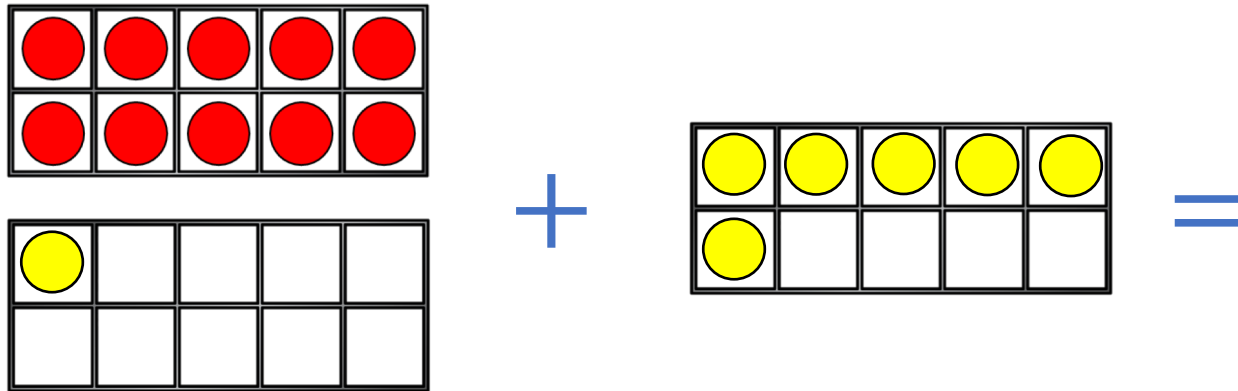
1 ten + 9 ones

Using number bonds

Have a think



$$11 + 6 = 17$$



1 ten + 1 one add 6 ones

1 ten + 7 ones

YOUR TURN

Have a go at questions
1 and 2 on the
worksheet

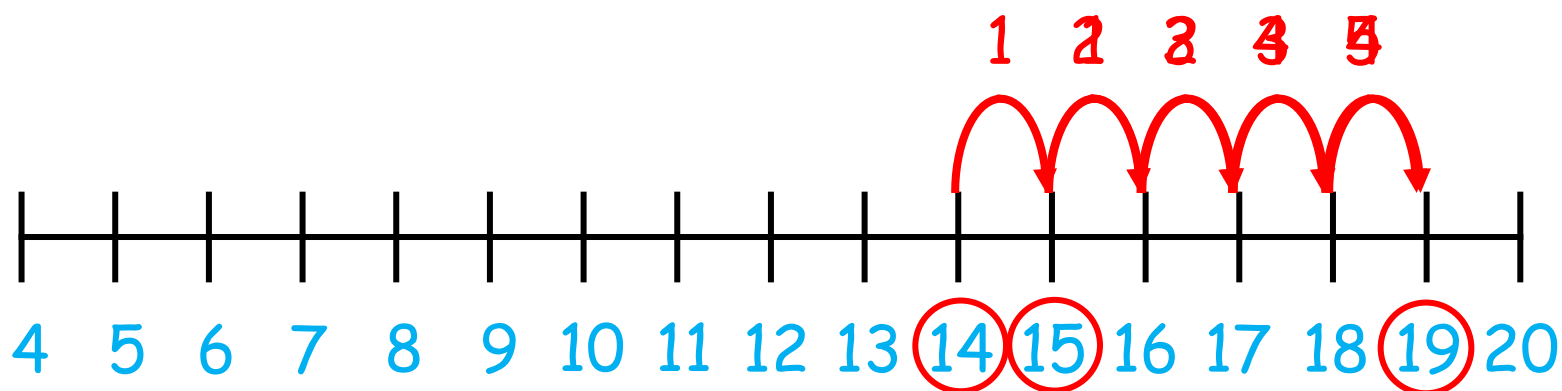


$$15 + 4 = 19$$

$$14 + 5 = 19$$

$$4 + 15 = 19$$

$$5 + 14 = 19$$



What is the same?

What is different?

Have a think

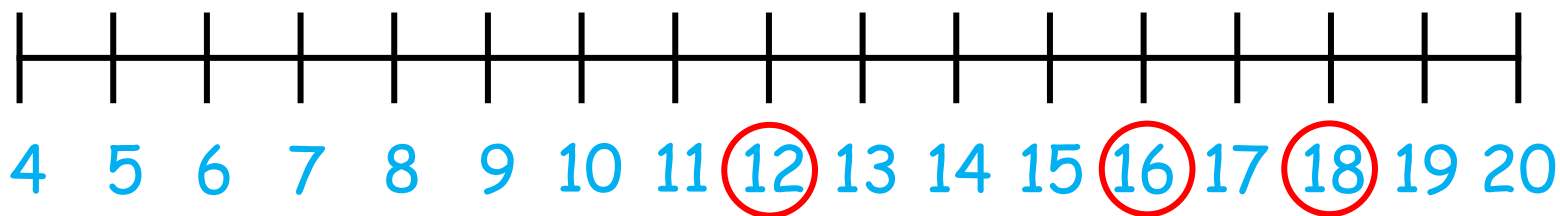


$$16 + 2 = 18$$

$$12 + 6 = 18$$

$$2 + 16 = 18$$

$$6 + 12 = 18$$



YOUR TURN

Have a go at questions
3 and 4 on the
worksheet

