


Instructions for Maths Lesson 2- 12th January

1. For this lesson you will need a pencil and a piece of paper or your green homework book. You might like to print the worksheet or you can just draw the answers on paper or in your green book.
2. Warm up your maths brain counting on from any number - you might enjoy [this video!](#)
3. Have a look at this video- [Spring1.2.2 - Add by counting on on Vimeo](#) or the powerpoint slides- pause it to have a go at some of the activities on the worksheet.

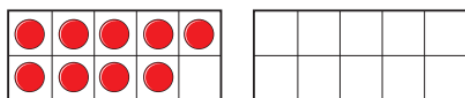
Add by counting on

White
Rose
Maths

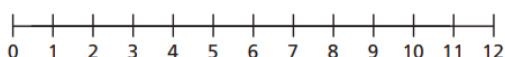
- 1 There are 9 children on the bus.
5 more children get on the bus.



How many children are on the bus now?

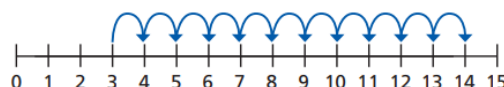


- 2 Eva has 4 coins.
Jack gives her 7 more coins.
How many coins does Eva have now?

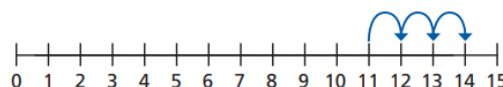


- 3 Ron and Mo are working out $3 + 11$ on a number line.

Ron's method

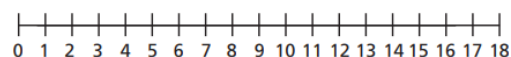


Mo's method



What is the same and what is different?

Use a number line to work out the additions.



a) $2 + 13$

b) $4 + 9$

c) $1 + 17$

4. You might like to make yourself a number line if you haven't already! You could play the game from yesterday using your number line- choose a number card and roll a dice to see how many to count on.

If you are feeling bored or have more time have a look at the 'Extra maths games and challenges' -pick a couple to get your number brain working!