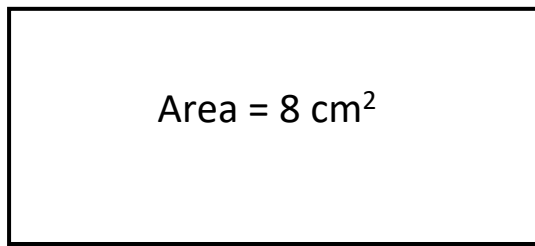


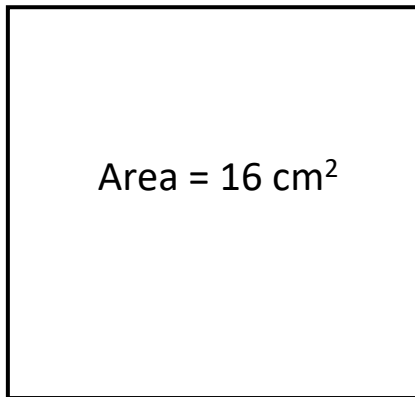
WALT: Use the properties of rectangles to deduce related facts and find missing lengths

BRONZE WILF: Use areas of rectangles to find missing lengths



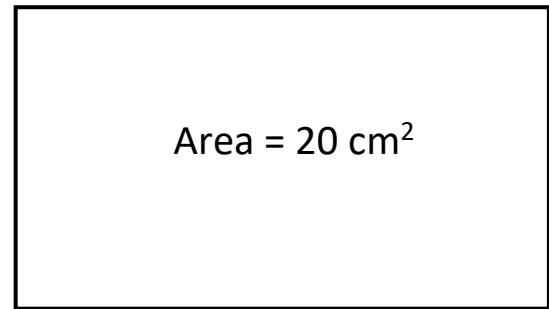
Width = ____ cm

4 cm



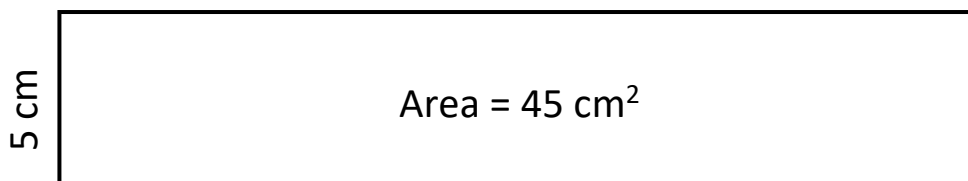
4 cm

Width = ____ cm



4 cm

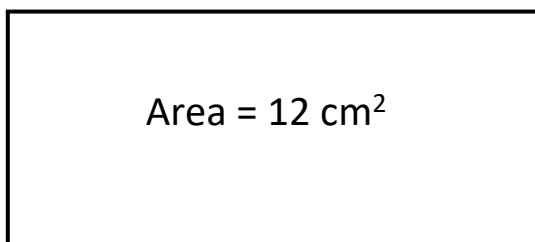
Length = ____ cm



5 cm

Length = ____ cm

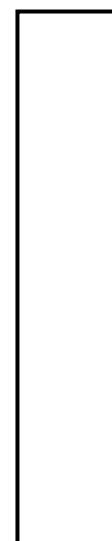
What could the lengths and widths of these rectangles be?



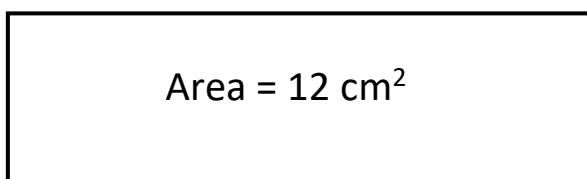
Width = ____ cm

Length = ____ cm

Area =
12 cm²



Length = ____ cm



Width = ____ cm

Length = ____ cm

Width = ____ cm

Now find the perimeter of each rectangle.