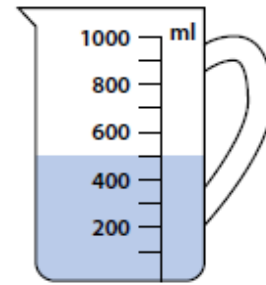


1. How much water is in this measuring jug?

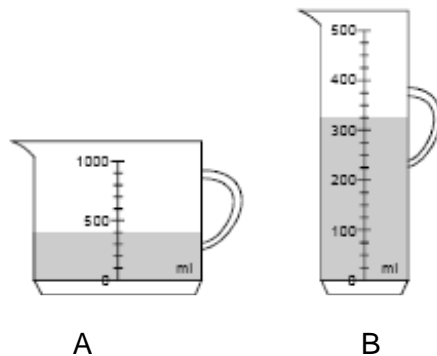


2. A jug holds 2 litres of juice.

How many 150 ml cups of juice can be filled from the jug? How much juice will be left in the jug?

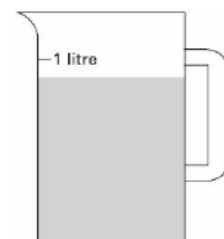
3. Which jug contains more water, A or B?

How much more does it contain? Explain how you worked it out.



4. Sophie poured some water out of a litre jug.

Look how much is left in the jug. Estimate how much water is left.



**5. If a can of cola holds 100ml, how much will 4 cans hold?
How many more cans would I need to make a 3 litres?**

6. A bath holds 80 litres. A shower uses 35 litres. How many litres are used if Mrs Hitchins has a bath and Ms Wreghitt has a shower? How much water will we save if Mrs Hitchins decides to have a shower too?