

COMPARE NUMBER SENTENCES



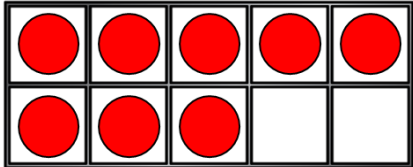

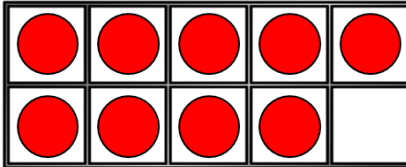
GET READY



1) This symbol $>$ means

2) Let's compare 5  8

3) Write a number less than 4

4) Compare   

1) This symbol $>$ means **Greater than**

2) Let's compare 5 $<$ 8

3) Write a number less than 4 **3, 2, 1, 0**

4) Compare

●	●	●	●	●
●	●	●		

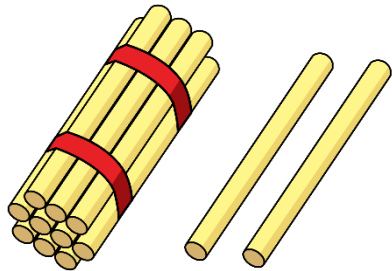
 $<$

●	●	●	●	●
●	●	●	●	


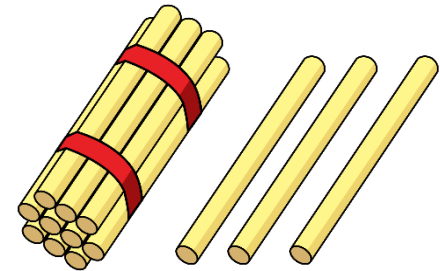
LET'S LEARN



Greater than or less than



is less than



is greater than



Let's use symbols to compare!

11	12	13	14	15	16	17	18	19	20
----	----	----	----	----	----	----	----	----	----

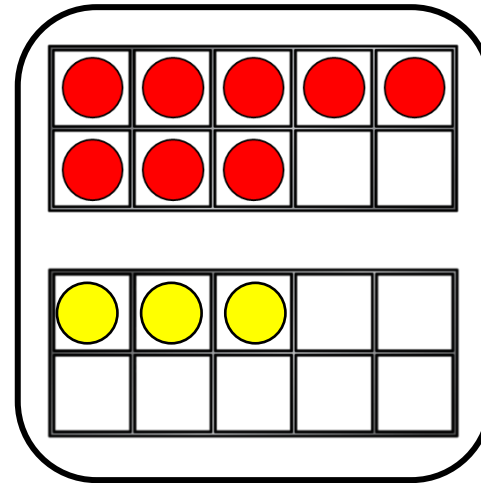
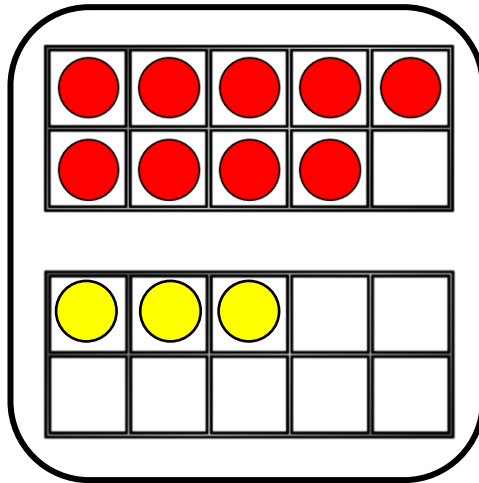
$>$ $=$ $<$

15 $>$ fourteen

eleven $<$ 1 ten and 9 ones

$10 + 8$ $=$ eighteen

Comparing number sentences



$$9 + 3$$



$$8 + 3$$

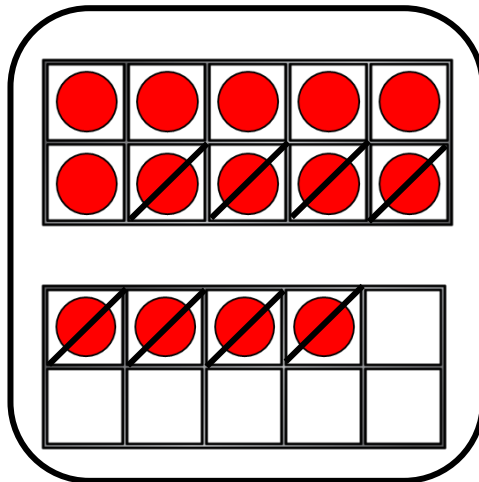
is greater
than

YOUR TURN

Have a go at question 1
on the worksheet



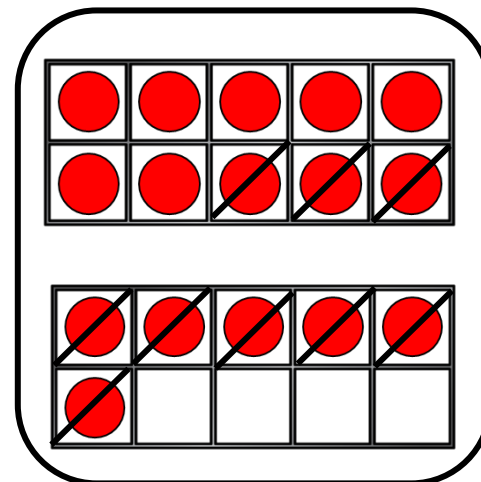
Comparing number sentences



$$14 - 8$$



is less
than




$$16 - 9$$

YOUR TURN

Have a go at question 2
on the worksheet






I answer both
sides first, then I
put in the symbol!

< = >

15

12 + 3




12 + 4

16

15

12 + 3




12 - 3

9

15

12 + 3



13 + 2

15




I don't need to answer
both sides every time.
Look carefully!

What is the same? What is different?


< = >

$11 + 9$




$11 + 5$

$11 + 9$



$11 - 9$

$11 + 9$



$12 + 8$

YOUR TURN

Have a go at question 3
on the worksheet





Think carefully!
What can you do to
make them equal?

17

13 + 4

=

20 -



13 + 4

=

19 -



13 + 4

=



-



YOUR TURN

Have a go at question 4
on the worksheet

