



Name: _____

Date: _____

Total Marks: /44

Animals Including Humans Assessment Test

1. Write the name of each animal.



a) _____




b) _____

c) _____

d) _____

4 marks

2. Match the animals to their group.



amphibian

bird

mammal

fish

reptile

5 marks

3. Write one feature of each group.

Amphibians

Fish

Birds

Mammals

Reptiles

5 marks


4. Explain what each of these diets is.

Carnivore


Herbivore

Omnivore

3 marks




5. Sort these animals by what they eat.



Carnivore	<input type="checkbox"/>	<input type="checkbox"/>
Omnivore	<input type="checkbox"/>	<input type="checkbox"/>
Herbivore	<input type="checkbox"/>	<input type="checkbox"/>

6 marks

6. Label the human body.



9 marks

7. What are the 5 human senses?

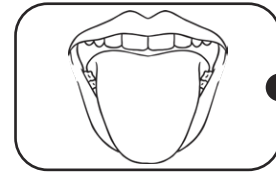
1. _____
2. _____
3. _____
4. _____
5. _____

5 marks

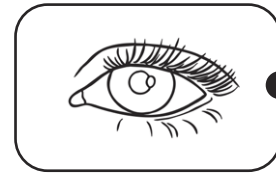
8. Why do humans have senses?

2 marks

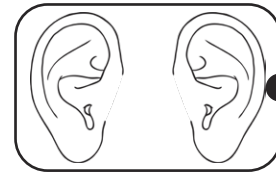
9. Match the sense to the correct part of the body.



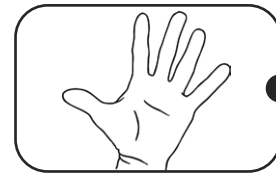
hearing



touch



smell





taste



sight

5 marks

1. Write the name of each animal.



a) dog

b) shark


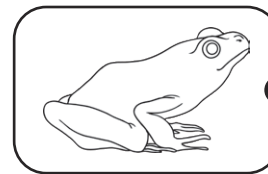


c) snake

d) frog

1 mark for each animal named correctly.

4 marks

2. Match the animals to their group.



amphibian

bird

mammal

fish

reptile

1 mark for each animal matched correctly.

5 marks

3. Write one feature of each group.

Amphibians

live in water as a baby and on land as an adult/smooth, slimy skin

Fish

scaly skin/gills/fins/lives in water

Birds

feathers/2 legs/beak/2 wings

Mammals

has hair/breathe air/babies feed on mother's milk

Reptiles

scales on skin/breathe air

Award 1 mark for each group with the correct feature. Children only need to identify one feature of each group.

5 marks

4. Explain what each of these diets is.

Carnivore

A carnivore is an animal that eats mainly meat.

Herbivore


A herbivore is an animal that eats mainly plants.

Omnivore


An omnivore eats both plants and meat.

1 mark for each correct answer.

3 marks



5. Sort these animals by what they eat.




Carnivore	C	F
Omnivore	A	B
Herbivore	D	E

1 mark for each animal correctly sorted.

6 marks

6. Label the human body.



1 mark for each body part correctly identified

9 marks

7. What are the 5 human senses?

1. taste
2. smell
3. hearing
4. sight
5. touch

1 mark for each correctly identified sense.

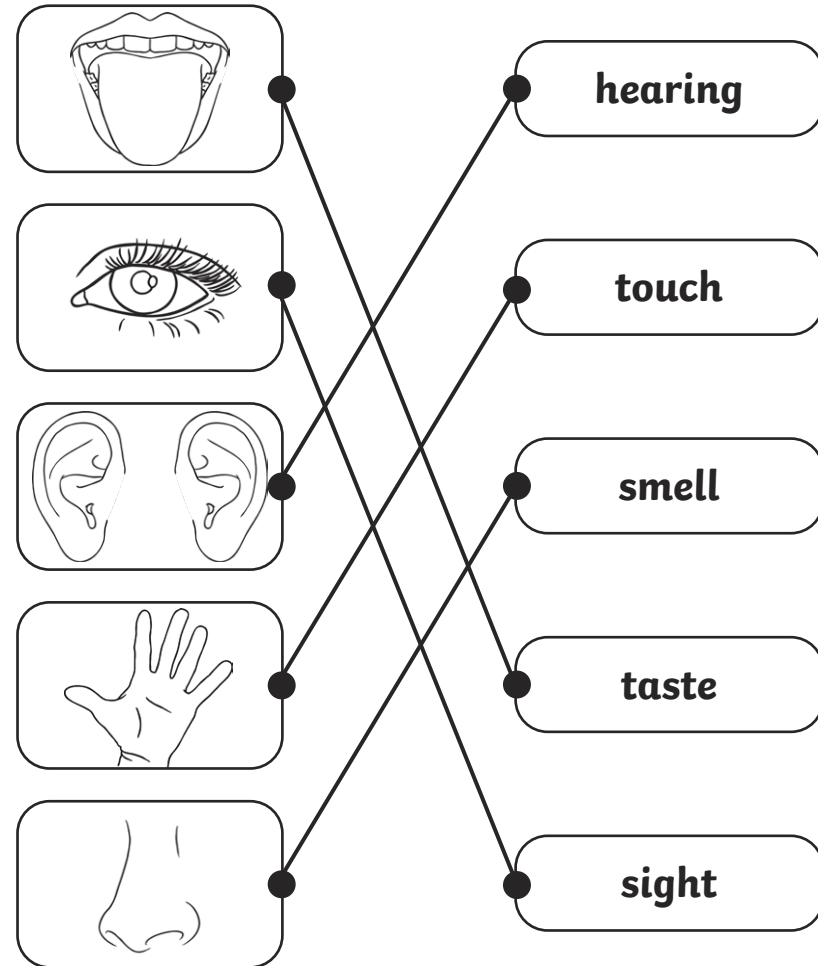
8. Why do humans have senses?

Senses tell us what is going on in the world around us and they help to keep us safe.

1 mark for referring to senses helping us experience the world around us. 1 mark for referring to senses keeping us safe.

5 marks

2 marks

9. Match the sense to the correct part of the body.

1 mark for each sense/body part matched correctly.

5 marks