

Thursday maths challenges

Ron, Amir and Alex record the scores of six football matches.

Unfortunately, Ron spilt paint on them.

Record the results based on what the children remember.

Match	Number of goals	1 goal = 2 goals
1		
2		
3		
4		
5		
6		



Match 1 had 3 more goals than match 3

Match 6 had 1 less goal than match 2










Match 4 had twice as many goals as match 3


Whitney and Teddy are making pictograms to show how many chocolate eggs each class won at the school fair.



Class	Number of eggs
1	
2	
3	
4	
5	
6	

Key
 = 5 eggs

Class	Number of eggs
1	
2	
3	
4	
5	
6	

Key
 = 10 eggs

What's the same and what's different about their pictograms?

Whose pictogram do you prefer and why?