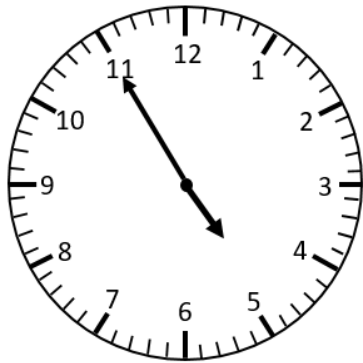


# Elapsed Time (5 min intervals) [2]

Work out the finish times. Draw the hands and write in digital.

Start Time

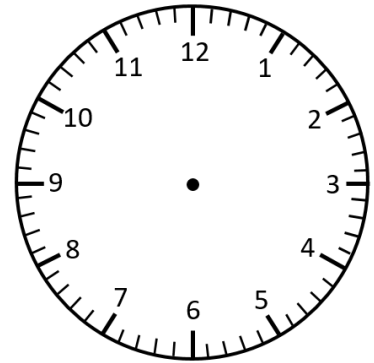


\_\_\_ : \_\_\_

Elapsed time

45mins

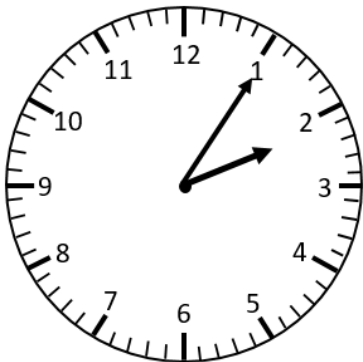
Finish Time



\_\_\_ : \_\_\_



Start Time

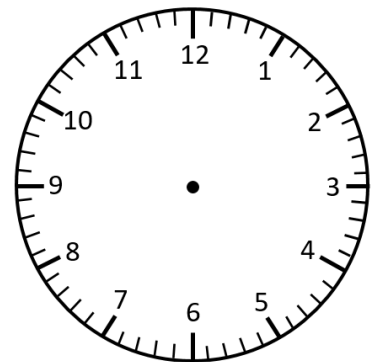


\_\_\_ : \_\_\_

Elapsed time

2hrs 20mins


Finish Time



\_\_\_ : \_\_\_



Start Time

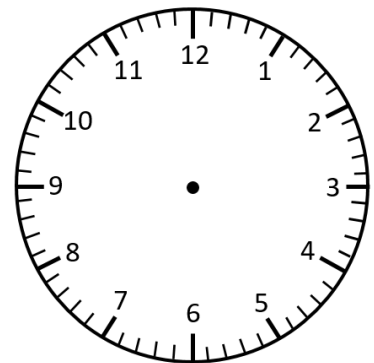


\_\_\_ : \_\_\_

Elapsed time

1 hr 15mins

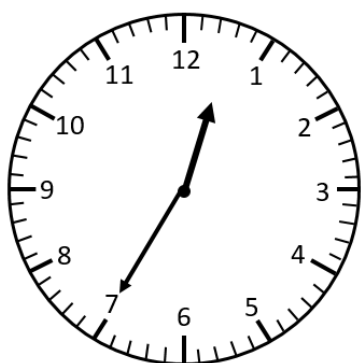
Finish Time



\_\_\_ : \_\_\_



Start Time

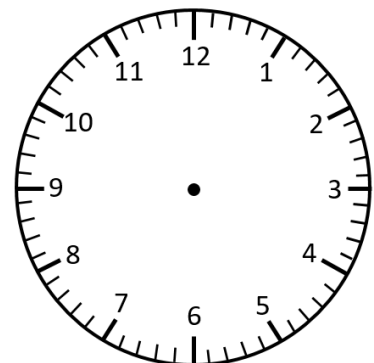


\_\_\_ : \_\_\_

Elapsed time

45mins

Finish Time



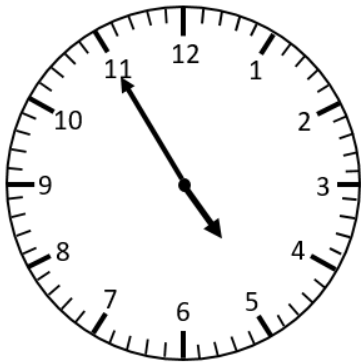
\_\_\_ : \_\_\_



# Elapsed Time (5 min intervals) [2] **Answers**

Work out the finish times. Draw the hands and write in digital.

Start Time

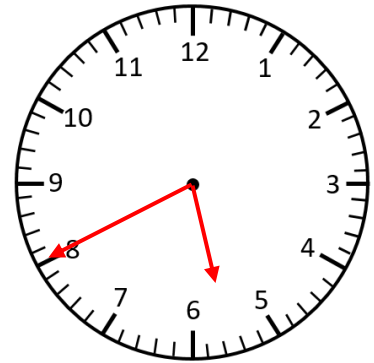


4 : 55

Elapsed time

45mins

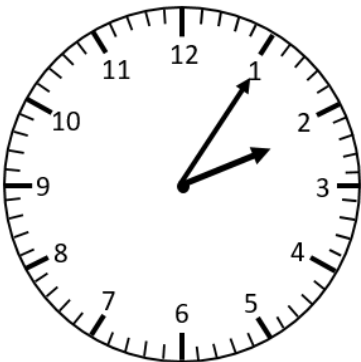
Finish Time



5 : 40



Start Time

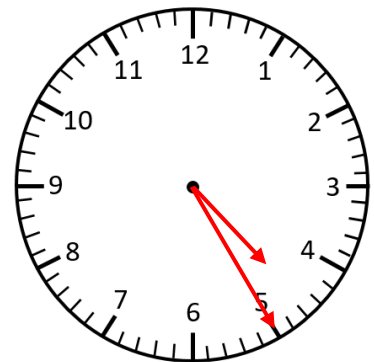


2 : 05

Elapsed time

2hrs 20mins

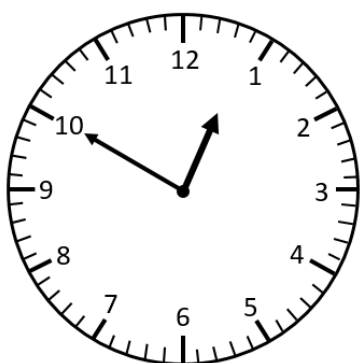
Finish Time



4 : 25



Start Time

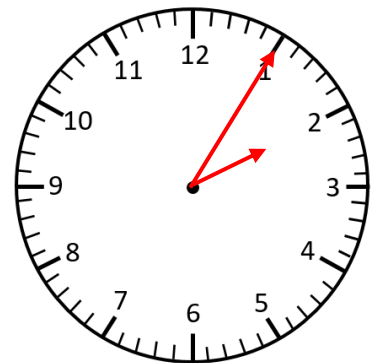


12 : 50

Elapsed time

1 hr 15mins

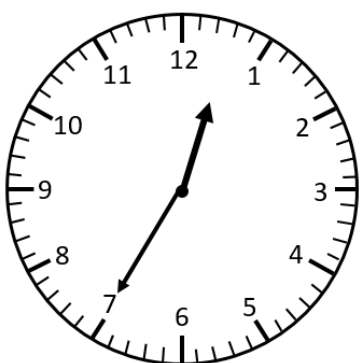
Finish Time



2 : 05



Start Time

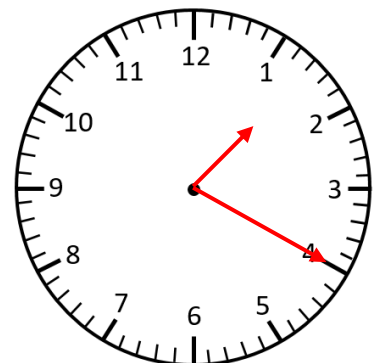


12 : 35

Elapsed time

45mins

Finish Time



1 : 20

