

Tuesday Shape Challenge





Question 1 –

Draw 2D Shapes



Here is part of a shape with straight sides.

Add one or more sides to make different shapes.



How many different shapes can you make?

Can you name them?

Tuesday Shape Challenge

Question 2 –

Sort 2D Shapes



Sort these 2D shapes using the Venn diagram.

1 vertical line
of symmetry

4 vertices



Add one more shape to each section.