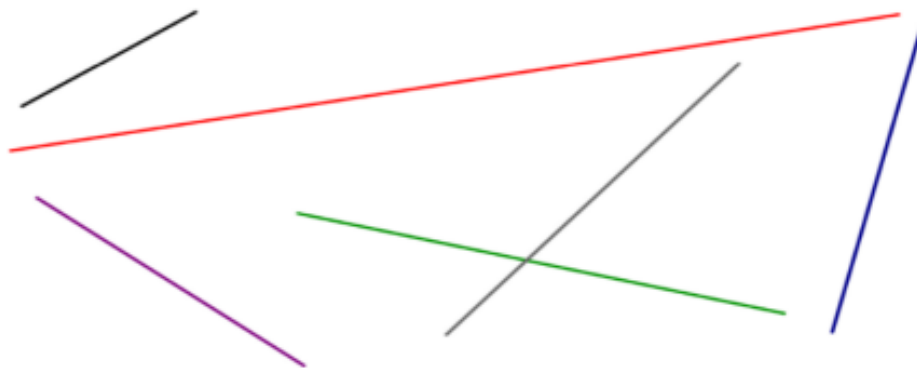


Monday math challenges

- Measure the lines to the nearest centimetre.
Can you measure the lines in millimetres?



- What unit of measurement would you use to measure these real life objects? Millimetres, centimetres or metres?

Fingernail

Eraser

Pencil

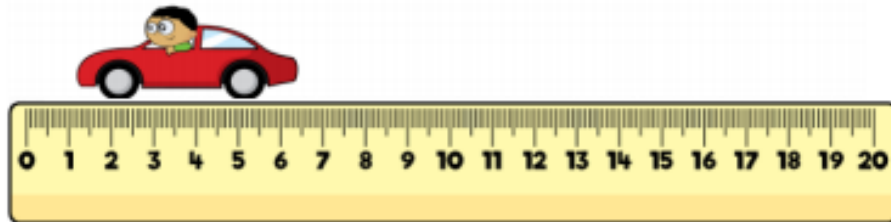
Height of a
house

Length of a
playground

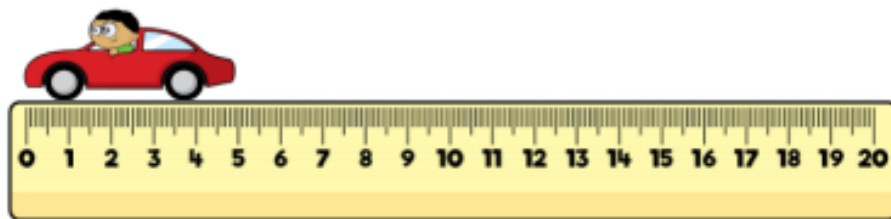
Length of a
table

Three children measured the same toy car.

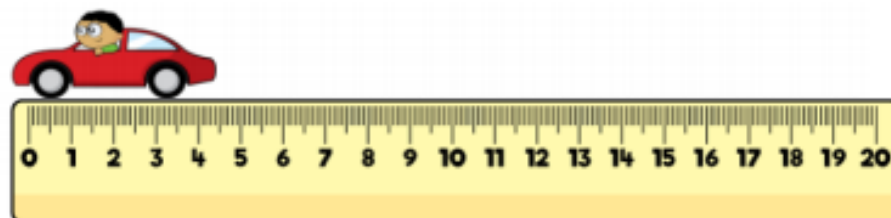
Eva says that the car is 6 cm and 5 mm



Dexter says the car is 5 cm



Annie says the car is 4 cm 5 mm



Who is correct?

Who is incorrect?

Explain why.