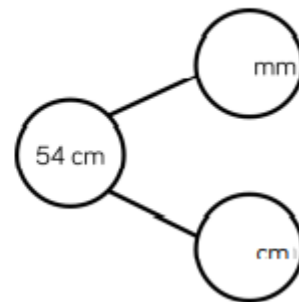
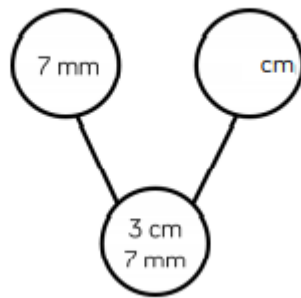
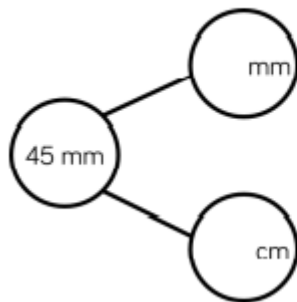
 Complete the part whole models.



71

Ron is thinking of a measurement.
Use his clues to work out which
measurement he is thinking of.



- In mm, my measurement is a multiple of 2
- It has 8 cm and some mm
- It's less than 85 mm
- In mm, the digit sum is 12