

WALT: Add and subtract 100's from a 3 digit number 12.11.21

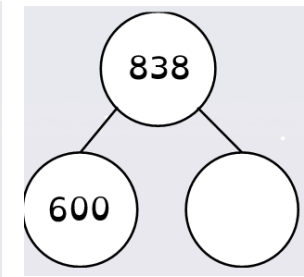
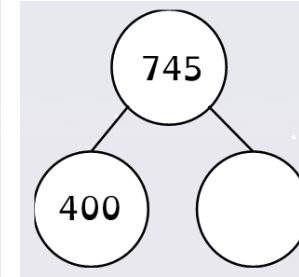
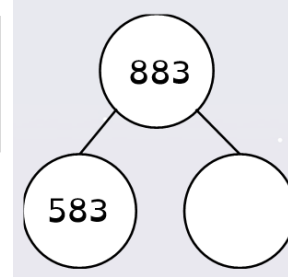
Do it: I can use a range of practical resources to work out calculations

Do it: I can complete a part whole model to show a sum

Deepen it: Use my explaining skills to check if practical resources match sum

Twist it: Solve word problems and write number sentence to match

Complete the part whole models:



**Do It!** Practice your number work

Brett has some flowers.




He buys 3 more bunches of these flowers.

How many flowers does he have now?



$442 + 300 =$

Filip makes the number 726



Cross out the hundreds to help you work out the subtractions.

a)  $726 - 100$

c)  $726 - 400$

b)  $726 - 200$

d)  $726 - 700$

**Deepen It!** Explain your thinking

Explain your answer:

Is this place value counter grid going to help Sarah accurately work out this sum?

$235 + 500 =$

hundreds	tens	ones

**Twist It!** Use what you know to solve a problem

Write the number sentence that this word problem represents and solve it.

1. Jenny has 456 pennies in her piggy bank. Jamal has 300 more pennies in his piggy bank. How many pennies does Jamal have?

2. Chen has 978 Maths Shed points. Joe has 500 fewer points. How many Maths Shed points does Joe have?